
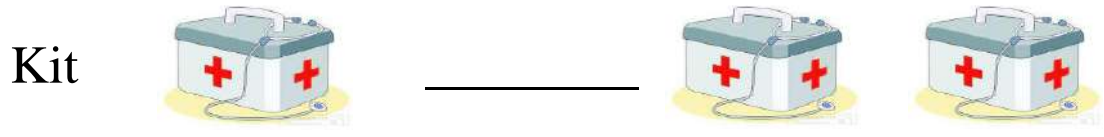




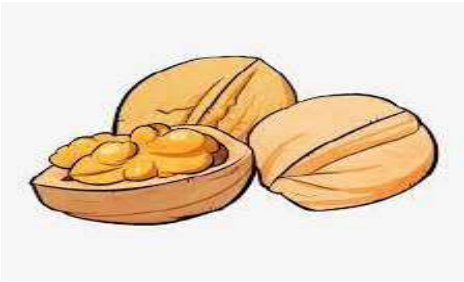



NEW HORIZON PUBLIC SCHOOL  
PRE-PRIMARY  
English Assignment (Term -II)

Q. Change the following from one to many



Q. Match the following words with correct pictures.

lip	
dog	
tin	
pig	
cot	
nut	

Q. Fill the missing alphabet.

a b \_\_\_\_\_ e

f \_\_\_\_\_ i \_\_\_\_\_

l \_\_\_\_\_ n \_\_\_\_\_ q

\_\_\_\_\_ s \_\_\_\_\_ u \_\_\_\_\_ w

\_\_\_\_\_ y \_\_\_\_\_



Q. look at the picture and write the name



\_\_\_\_\_



\_\_\_\_\_



\_\_\_\_\_



\_\_\_\_\_



\_\_\_\_\_



\_\_\_\_\_



\_\_\_\_\_



\_\_\_\_\_



\_\_\_\_\_



\_\_\_\_\_

## Q Myself

1. My name is \_\_\_\_\_

2. I am a \_\_\_\_\_

3. I am \_\_\_\_\_ years old.

4. I study in \_\_\_\_\_

5. I love my \_\_\_\_\_



## Q. Use This/ That (near – this, far – that)

1. \_\_\_\_\_ is a bat .




2. \_\_\_\_\_ is a tree.



3. \_\_\_\_\_ is a doll.



4. \_\_\_\_\_ is a fish.



5. \_\_\_\_\_ is a pencil.




Q. look at the picture and write the name.



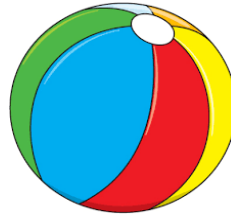
1. \_\_\_\_\_



2. \_\_\_\_\_



3. \_\_\_\_\_



4. \_\_\_\_\_



5. \_\_\_\_\_

Q. Fill in the blanks




h \_\_\_\_\_ t



t \_\_\_\_\_ p



h \_\_\_\_\_ t



p \_\_\_\_\_ d



j \_\_\_\_\_ g

NEW HORIZON PUBLIC SCHOOL  
PRE-PRIMARY  
HINDI ASSIGNMENT TERM-2

Name : \_\_\_\_\_

Date : \_\_\_\_\_

1. खाली स्थान भरिए।

क			घ	ङ
	छ			ञ
		ड		ण
त			ध	
	फ		भ	म
य			व	
	ष			
क्ष			श्र	



Name : \_\_\_\_\_



Date : \_\_\_\_\_

2. क - श्र लिखो।


Name : \_\_\_\_\_

Date : \_\_\_\_\_

3. चित्र देखकर सही शब्द लिखिए


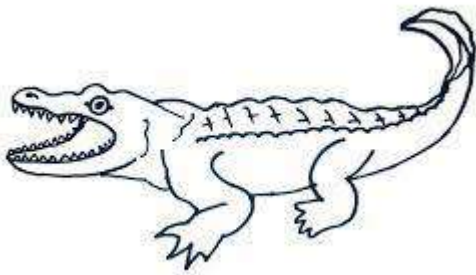



10

Name : \_\_\_\_\_

Date : \_\_\_\_\_







4 . चित्र देखकर सही शब्द लिखिए



Name : \_\_\_\_\_

Date : \_\_\_\_\_


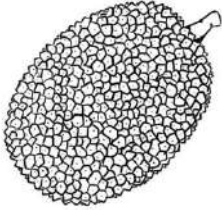
5. चित्र देखकर सही शब्द से मिलान करो

	भवन
	कलम
	कलश
	सड़क
	बतख
	नहर

Name : \_\_\_\_\_

Date : \_\_\_\_\_







6. चित्र देखकर सब्जियों के नाम लिखो



Name : \_\_\_\_\_

Date : \_\_\_\_\_


7. चित्र देखकर सही शब्द से मिलान करो

	थरमस
	पनघट
	अजगर
	खटमल
	अदरक
	बरगद

Name : \_\_\_\_\_

Date : \_\_\_\_\_








### 8. चित्र देखकर सही शब्द लिखिए



Name : \_\_\_\_\_

Date : \_\_\_\_\_

9. खाली स्थान भरो


	अजय _____ चल।
	_____ चख कर रख।
	नमन _____ पर चढ़।
	_____ पर कमल रख।
	_____ पर चल।
	_____ उधर रख।
	_____ भर कर रख।



Name : \_\_\_\_\_

Date : \_\_\_\_\_

10. खाली स्थान भरो



\_\_\_\_\_ पर चल।



अजय \_\_\_\_\_ कर।



असलम \_\_\_\_\_ चख।



यश \_\_\_\_\_ पढ़।



\_\_\_\_\_ चख कर रख।

10

\_\_\_\_\_ तक पढ़।

NEW HORIZON PUBLIC SCHOOL

MATHS ASSIGNMENTS

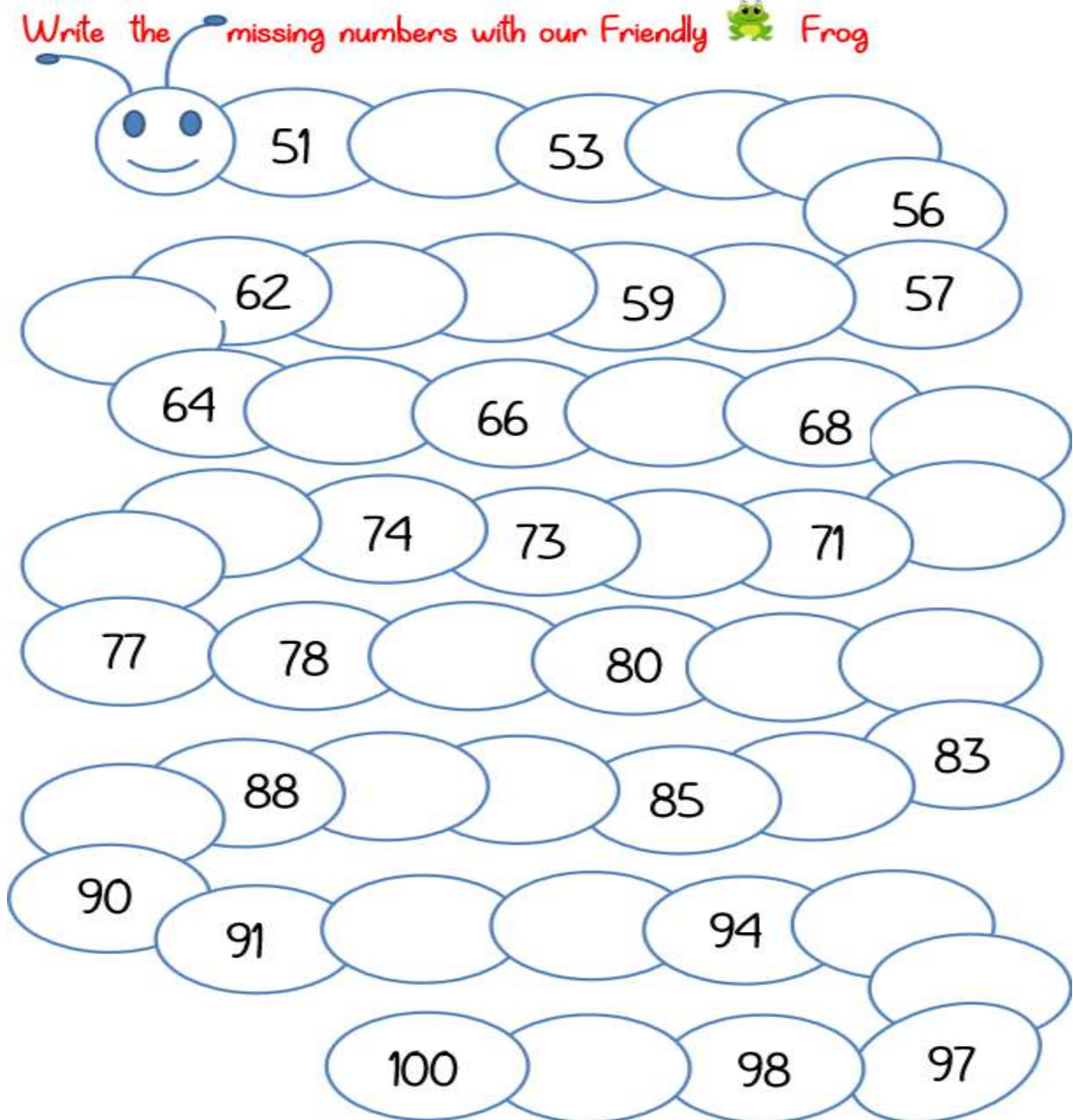
FINAL TERM

PRE-PRIMARY CLASS

NAME- \_\_\_\_\_

DATE- \_\_\_\_\_

Write the missing numbers with our Friendly  Frog



A grid of overlapping circles containing numbers and empty spaces. The numbers are arranged in a sequence that starts at 51 and ends at 100, with some numbers missing. The circles are arranged in a roughly rectangular shape with some overlapping. The numbers are: 51, 53, 56, 57, 62, 59, 64, 66, 68, 74, 73, 71, 77, 78, 80, 83, 88, 85, 90, 91, 94, 100, 98, 97.

**Backward Counting 50-1.**

50	40	30	20	10

What Comes After (1-50)?

39 \_\_\_\_\_

41 \_\_\_\_\_

24 \_\_\_\_\_

13 \_\_\_\_\_

18 \_\_\_\_\_

30 \_\_\_\_\_

27 \_\_\_\_\_

45 \_\_\_\_\_

33 \_\_\_\_\_

What comes in between?

What comes between 1 to 50

19		21
----	--	----

30		32
----	--	----

29		31
----	--	----

9		11
---	--	----

17		19
----	--	----

33		35
----	--	----

39		41
----	--	----

8		10
---	--	----

What Comes Before (1-50)?

\_\_\_\_\_ 39

\_\_\_\_\_ 17

\_\_\_\_\_ 25

\_\_\_\_\_ 11

\_\_\_\_\_ 20

\_\_\_\_\_ 42

\_\_\_\_\_ 34

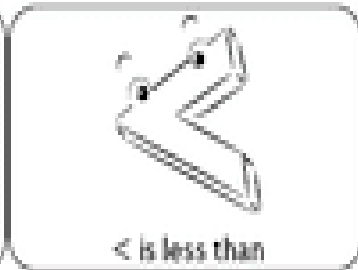

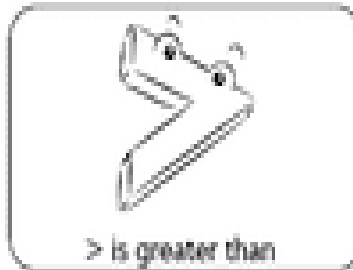
\_\_\_\_\_ 27

\_\_\_\_\_ 16

Put > , < , =

## COMPARING NUMBERS

Fill each circle with the correct sign.



$45 \bigcirc 48$

$49 \bigcirc 49$

$41 \bigcirc 25$

$37 \bigcirc 44$

$24 \bigcirc 39$

$16 \bigcirc 46$

$35 \bigcirc 31$

$34 \bigcirc 34$

$37 \bigcirc 47$

$15 \bigcirc 35$

$42 \bigcirc 19$








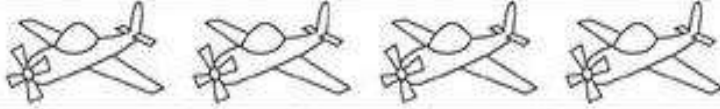



$24 \bigcirc 42$

Write the numbers in words.

1	11
2	12
3	13
4	14
5	15
6	16
7	17
8	18
9	19
10	20



Count and write number name.

	7	seven
		
		
		
		
		
		
		
		
		
		

## Addition (1-10)

$$\begin{array}{r} 5 \quad ||||| \\ + 2 \quad || \\ \hline \end{array}$$

$$\begin{array}{r} 4 \\ + 3 \\ \hline \end{array}$$

$$\begin{array}{r} 7 \\ + 1 \\ \hline \end{array}$$

$$\begin{array}{r} 1 \\ + 3 \\ \hline \end{array}$$

$$\begin{array}{r} 3 \\ + 2 \\ \hline \end{array}$$

$$\begin{array}{r} 6 \\ + 2 \\ \hline \end{array}$$

$$\begin{array}{r} 4 \\ + 4 \\ \hline \end{array}$$

$$\begin{array}{r} 4 \\ + 6 \\ \hline \end{array}$$

## Subtract

①

$$\begin{array}{r} 6 \\ - 3 \\ \hline \\ \hline \end{array}$$

②

$$\begin{array}{r} 3 \\ - 2 \\ \hline \\ \hline \end{array}$$

③

$$\begin{array}{r} 4 \\ - 3 \\ \hline \\ \hline \end{array}$$

④

$$\begin{array}{r} 5 \\ - 1 \\ \hline \\ \hline \end{array}$$

⑤

$$\begin{array}{r} 4 \\ - 4 \\ \hline \\ \hline \end{array}$$

⑥

$$\begin{array}{r} 8 \\ - 5 \\ \hline \\ \hline \end{array}$$

⑦

$$\begin{array}{r} 9 \\ - 4 \\ \hline \\ \hline \end{array}$$

⑧

$$\begin{array}{r} 7 \\ - 3 \\ \hline \\ \hline \end{array}$$

⑨

$$\begin{array}{r} 5 \\ - 2 \\ \hline \\ \hline \end{array}$$

⑩

$$\begin{array}{r} 9 \\ - 7 \\ \hline \\ \hline \end{array}$$

⑪

$$\begin{array}{r} 5 \\ - 3 \\ \hline \\ \hline \end{array}$$

⑫

$$\begin{array}{r} 8 \\ - 6 \\ \hline \\ \hline \end{array}$$

**NEW HORIZON PUBLIC SCHOOL**

**EVS ASSIGNMENTS**

**FINAL TERM**

**PRE-PRIMARY CLASS**



Name- \_\_\_\_\_

Date- \_\_\_\_\_





Write the name of the Bird.



Write the colour name.



Write the name of Vegetable.



Match the Body Parts with Picture.



ear

nose

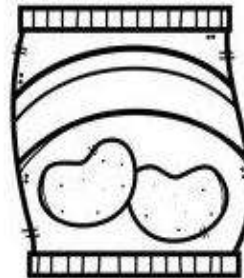
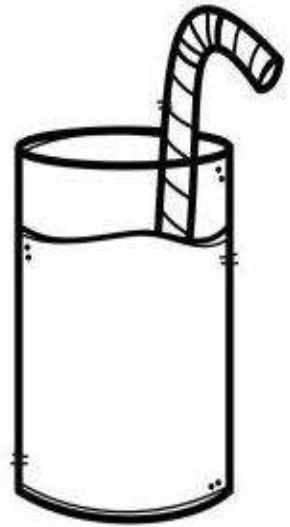





eye

foot

mouth

hand

Colour the Healthy Food.





# Days of the Week



**Monday**



**Tuesday**



**Wednesday**



**Thursday**



**Friday**



**Saturday**



**Sunday**



NEW HORIZON PUBLIC SCHOOL

PRE-PRIMARY

URDU ASSIGNMENTS

FINAL TERM

Name- \_\_\_\_\_

Date- \_\_\_\_\_

گنتی

☆	۱
☆☆	۲
☆☆☆	۳
☆☆☆☆	۴
☆☆☆☆☆	۵
☆☆☆☆☆☆	۶
☆☆☆☆☆☆☆	۷
☆☆☆☆☆☆☆☆	۸
☆☆☆☆☆☆☆☆☆	۹
☆☆☆☆☆☆☆☆☆☆	۱۰

سوال -2۔ درست حرف چن کر خالی جگہوں کو بھریے :

ب ----- (پ، ٹ)

ج ----- (چ، خ)

ڈ ----- (ذ، ڈ)

ک ----- (گ، ق)

ز ----- (ژ، ز)

ی ----- (ہ، ے)

سوال-3۔ درج ذیل حروف کو جوڑ کر لکھیے:

----- = ہ + ب

----- = ہ + ٹ

----- = ہ + ج

----- = ہ + ک

----- = ہ + ڈ

سوال-4۔ نیچے دیئے گئے تاروں کو گنیے اور ہندسوں میں لکھیے:

----- ☆☆

----- ☆☆☆☆☆

----- ☆☆☆

----- ☆☆☆☆☆

----- ☆☆☆☆

## مشق

بِ بِ بِ بِ بِ بِ

اَ اِ اُ اِ اِ اِ

Handwriting practice lines consisting of multiple horizontal lines for writing practice.